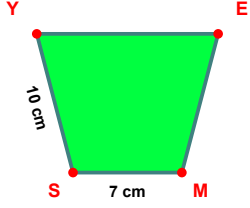
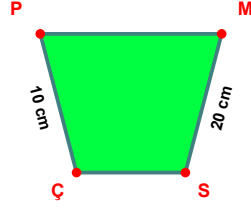


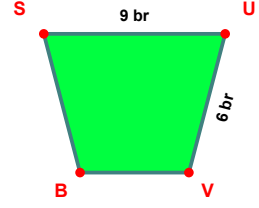
SORU: Aşağıdaki şekillerde verilen, kenar uzunlukları farklarını bulunuz.



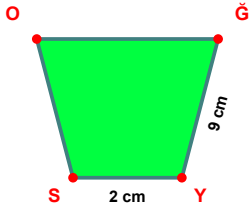
$$|SY| - |MS| = \dots\dots\dots$$



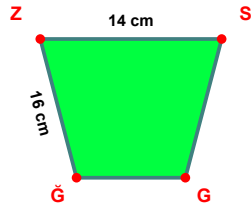
$$|MS| - |ÇP| = \dots\dots\dots$$



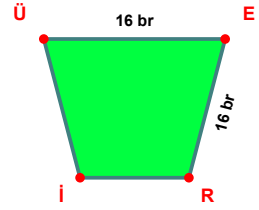
$$|SU| - |UV| = \dots\dots\dots$$



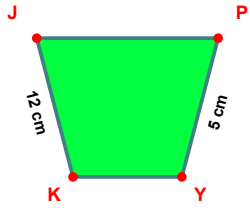
$$|ĞY| - |YS| = \dots\dots\dots$$



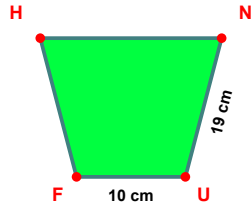
$$|ĞZ| - |ZS| = \dots\dots\dots$$



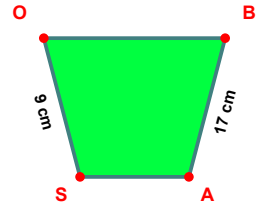
$$|ÜE| - |ER| = \dots\dots\dots$$



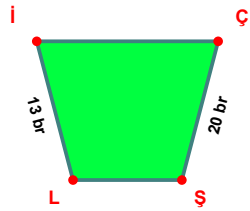
$$|KJ| - |PY| = \dots\dots\dots$$



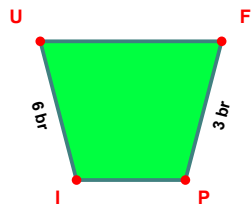
$$|NU| - |UF| = \dots\dots\dots$$



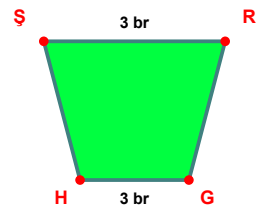
$$|BA| - |SO| = \dots\dots\dots$$



$$|ÇŞ| - |Lİ| = \dots\dots\dots$$

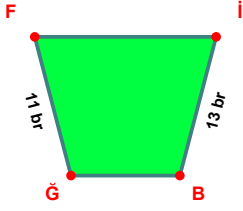


$$|IU| - |FP| = \dots\dots\dots$$

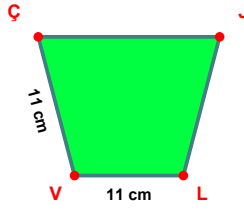


$$|GH| - |ŞR| = \dots\dots\dots$$

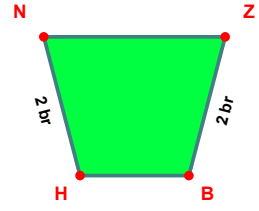
SORU: Aşağıdaki şekillerde verilen, kenar uzunlukları farklarını bulunuz.



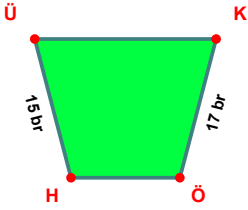
$$|İB| - |İF| = \dots\dots\dots$$



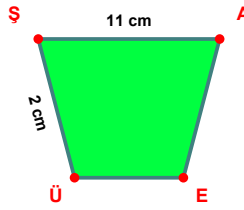
$$|VÇ| - |LV| = \dots\dots\dots$$



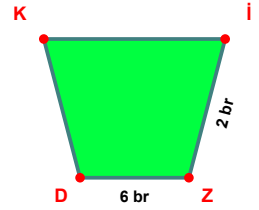
$$|HN| - |ZB| = \dots\dots\dots$$



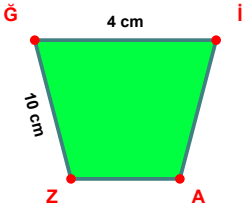
$$|KÖ| - |HÜ| = \dots\dots\dots$$



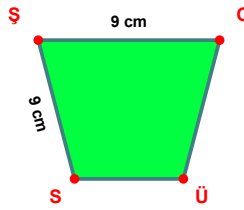
$$|ŞA| - |ÜŞ| = \dots\dots\dots$$



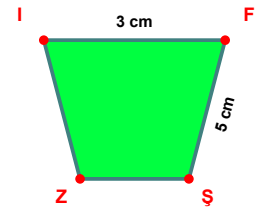
$$|ZD| - |İZ| = \dots\dots\dots$$



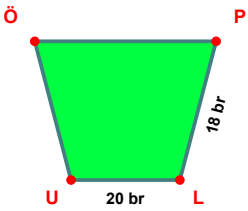
$$|Zİ| - |İĞ| = \dots\dots\dots$$



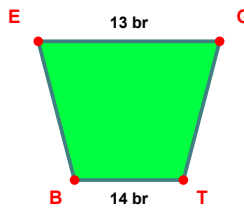
$$|ŞO| - |SS| = \dots\dots\dots$$



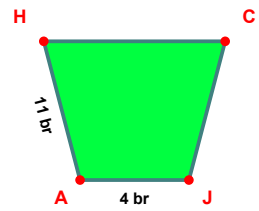
$$|FŞ| - |İF| = \dots\dots\dots$$



$$|LU| - |PL| = \dots\dots\dots$$



$$|TB| - |EG| = \dots\dots\dots$$



$$|AH| - |JA| = \dots\dots\dots$$

SÜREÇ ODAKLI DEĞERLENDİRME ÖLÇEĞİ

Doğru Sayısı: / 24

Öğretmen ilgili kutucuğu işaretler.

Geliştirilmeli (0-8)

İyi (9-14)

Çok İyi (15-20)

Mükemmel (21-24)

☐☐☐☐

Hazırlayan:

Bu bölüme sınıfınızın ilgili kazanıma yönelik genel durumuna ilişkin gözlem ve izlenimlerinizi, öğrencilerinizin bu kazanımla ilgili öğrenme eksikliklerini ve bu eksikliklerin giderilmesi amacıyla yaptığınız/yapmayı planladığınız faaliyetleri not edebilirsiniz.

No	Adı - Soyadı	Toplam Puan	Değerlendirme
1			
2			
3			
4			
5			
6			
7			
8			
9			
10			
11			
12			
13			
14			
15			
16			
17			
18			
19			
20			
21			
22			
23			
24			
25			
26			
27			
28			
29			
30			
31			
32			
33			
34			
35			

Hazırlayan: